



# **Year 1 Home Learning Pack**

## **Thursday 11<sup>th</sup> February &**

## **Friday 12<sup>th</sup> February**

Name:

Date returned to school:



**Year 1 and 2 Weekly Topic Mat**  
**Our Stories and Celebrations from Around the World**  
**topic**

<b>Vocabulary</b>	
<b>Pancake</b>	A thin, flat cake of batter which is fried on both sides in a pan.
<b>Shrove Tuesday</b>	Also known as Pancake Day. A Christian festival celebrated on the Tuesday before Lent.
<b>Lent</b>	Six weeks leading up to Easter where Christians give up luxuries to remember when Jesus went into the desert for 40 days to fast and pray.
<b>Christians</b>	Christians believe in just one God who created the world and all that is in it.
<b>Chinese New Year</b>	Is the biggest holiday celebrated among Chinese people. It is often referred to as the spring festival because it signals the beginning of spring. It is a time when families and friends get together to say goodbye to the old and welcome the new.

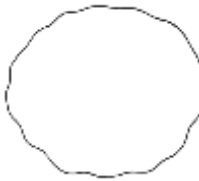
<b>5 Finger Facts</b>	
Pancake Day is also called Shrove Tuesday.	
Shrove Tuesday is the day before Lent begins.	
Lent is a time when Christians get ready for Easter by giving up luxuries.	
Chinese New Year is the biggest holiday celebrated among Chinese people.	
Chinese New Year is a time when families and friends get together to say goodbye to the old and welcome the new.	

**This week's activities**

All about Pancake Day



Design your own pancake



My Pancake Shopping List

My Pancake Shopping List

\_\_\_\_\_

\_\_\_\_\_

\_\_\_\_\_

\_\_\_\_\_

\_\_\_\_\_



Make your pancake



Chinese New Year

Dragon Dances



**At the end of the week, you will be using your knowledge and skills to make pancakes and design a poster for Chinese New Year.**

## Thursday 11<sup>th</sup> February



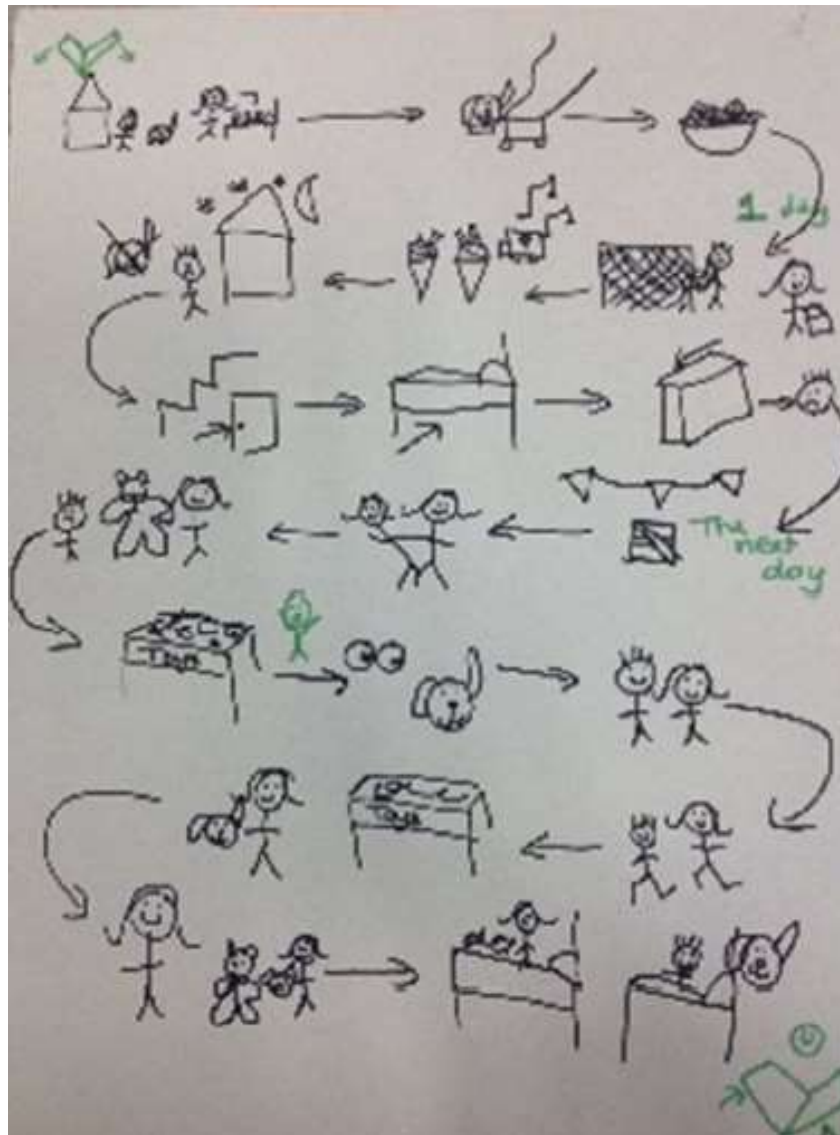
**9:00 - 9:30am - Reading Eggs**

Complete your daily assignments on Reading Eggs. These should come up and include a Storyland Session and a Driving Lesson.

9:30 - 10:15am - Writing

To help you when writing your instructions create a story map of making your pancake. Here is an example to help you.

Remember the order of the instructions is very important. What are you going to add to your pancake once they are made?





**10am - Don't forget to log onto the class zoom.**



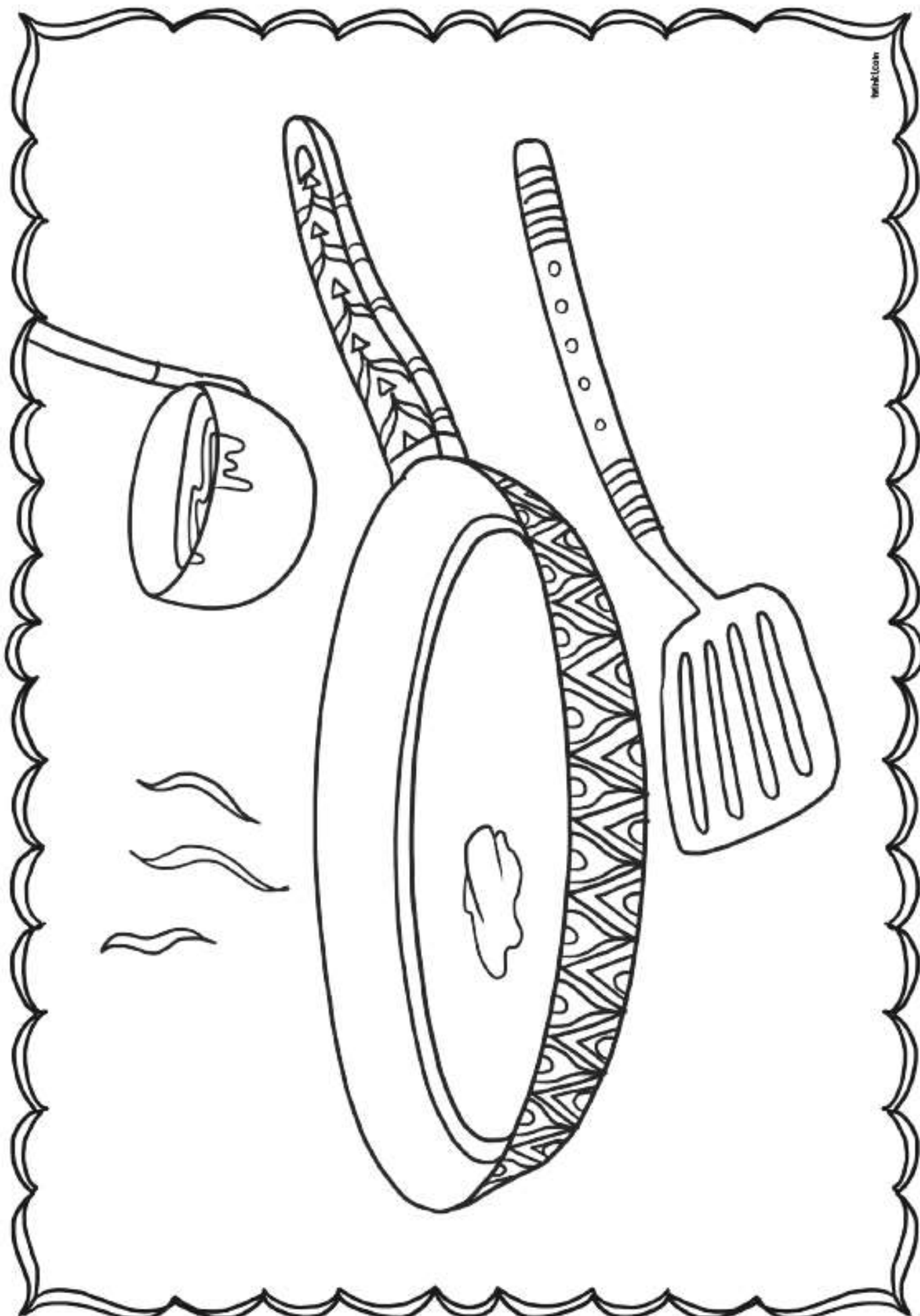
**10:30 - 10:45am Brain break!**

Go outside and get some fresh air, go and have a chat with someone about something you have done this morning or play with your favourite toy.

**10:45 - 11am Times Tables Rock Stars**

Log on to times tables rock stars and see if you can beat your last score.

**11 - 11:05am - Before you get back to work let's do a mindfulness activity**



11:05 - 11:20 am - Handwriting and daily phonics

Watch <https://teachhandwriting.co.uk/continuous-cursive-joins-choice-4.html> (as)

Complete 'as' handwriting sheet

© 2018 Teach Children Ltd



## Daily phonics

Please click on the link for your daily phonics session and complete the activities detailed daily.

**ve making /v/ in give**

Watch <https://www.youtube.com/watch?v=jNO9G-Qc69Q&list=PLuGr6z2H2KNHYn40Dv4gIRCloiUg2cA-0&index=9>

Complete the spelling quiz on Purple Mash

LO: Tens and ones

Click here for your Maths lesson <https://vimeo.com/500467998>

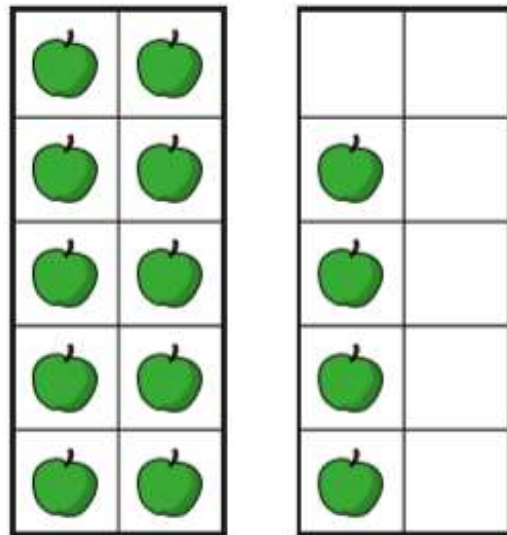
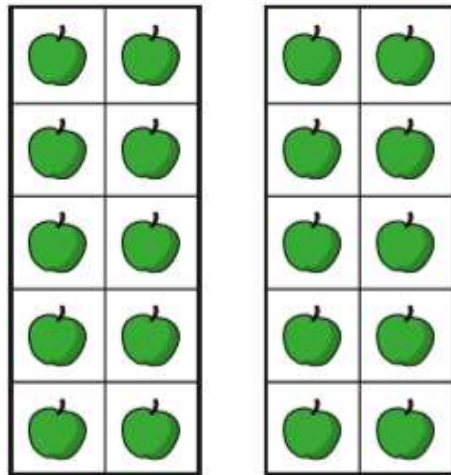
Complete the flashback

1	2	3	4	5	6	7	8	9	10
11	12	13	14	15	16	17	18	19	20
21	22	23	24	25	26	27	28	29	30
31	32	33	34	35	36	37	38	39	40
41	42	43	44	45	46	47	48	49	50

- 1) Find the number 20
- 2) Find the number 40
- 3) Find the number 16
- 4) Find the number 26

Have a go at questions 1 and 2 on the next page

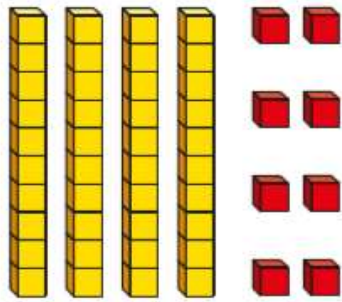
**I** How many apples are there?



There are  tens and  ones.

There are  apples.


2 What number is shown?



There are  tens and  ones.

The number shown is

Have a go at this when prompted



42 =  tens and 2 ones

Have a go at questions 3 and 4 on the next page

**3** Draw base 10 to show each number.

a) 23

b) 3 tens and 2 ones



**4** Complete the number sentences.

a) 1 ten and 8 ones =

b)  = 2 tens and 5 ones

c) 41 =  tens and  one

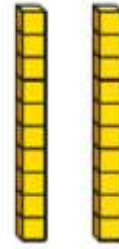
d) 37 ones =  tens and  ones

e) 2 tens and 10 ones =

Complete question 5

**5** Eva and Jack are making the same number.

Eva's number has these tens.



Jack's number has nine ones.

What number are Eva and Jack making?



12 - 1pm - Lunch


1pm - Pancake Day

Make Pancakes

Today is the day you make your pancake. Please send us a picture once you have made them.

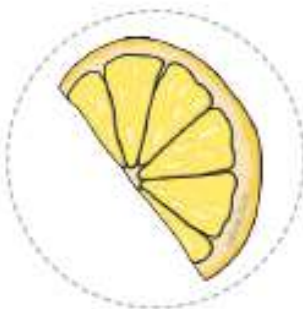
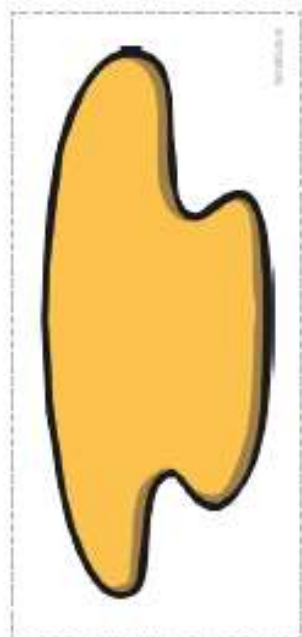

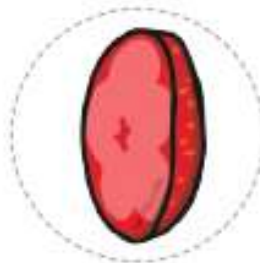
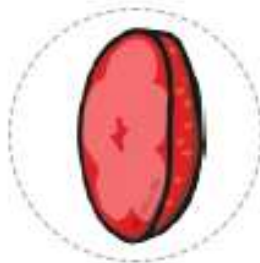
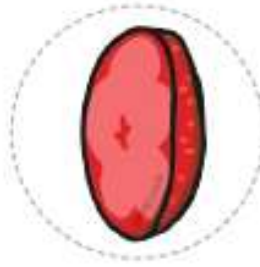
If you are not able to make pancakes then use the sheets on the next few pages and cut out your toppings and stick them onto your pancake.

Cut and stick your favourite toppings on to your pancake.











## Friday 12<sup>th</sup> February



9:00 - 9:30am - Reading Eggs

**9:30 - 10:15am - Writing**

Using your plan write your instructions for making your pancakes. Do you have a name for your pancake?

Use 'Pancake Recipe' on Purple Mash to write your instructions.

**10:15 - 10:30am - Times Tables Rock Stars**

See if you can get your best score yet!



**10:30 - 10:45am Brain break!**

Think about all the things you have done this week, what has been your favourite thing to do during your brain break? Do that again today.

**10:45 - 10:55am - Before you get back to work let's do a mindfulness activity**

**2021 Year of the Ox**



**10:55 - 11:10am - Daily phonics**

Please click on the link for your daily phonics session and complete the activities detailed daily.

**se making /z/ in cheese**

Watch <https://www.youtube.com/watch?v=kl1NNUypGUk&list=PLuGr6z2H2KNHYn40Dv4gIRClouUg2cA-0&index=8>

Complete the spelling quiz on Purple Mash

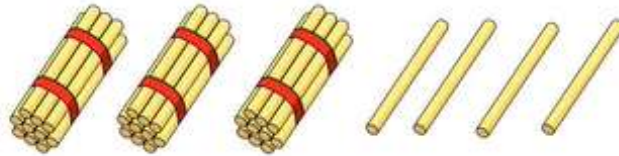
**11:25 - 12 - Maths**



LO: Represent numbers to 50

Complete the flashback

1) How many?

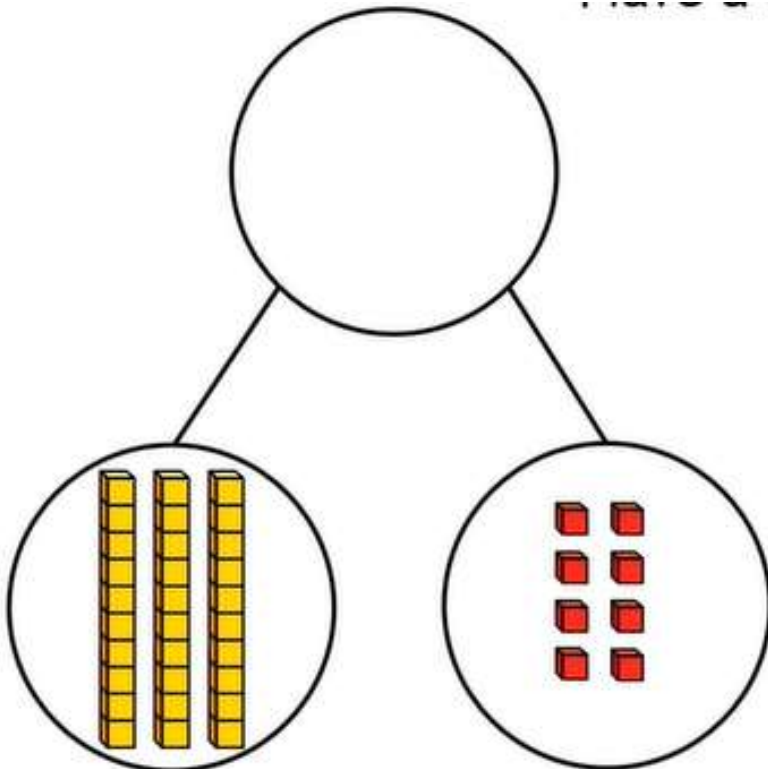


2) What comes next? 36, 37, 38, 39 \_\_\_\_

3) Which is equal to 5 tens?  
fifty or fifteen

4) What comes next? 32, 31, 30, \_\_\_\_

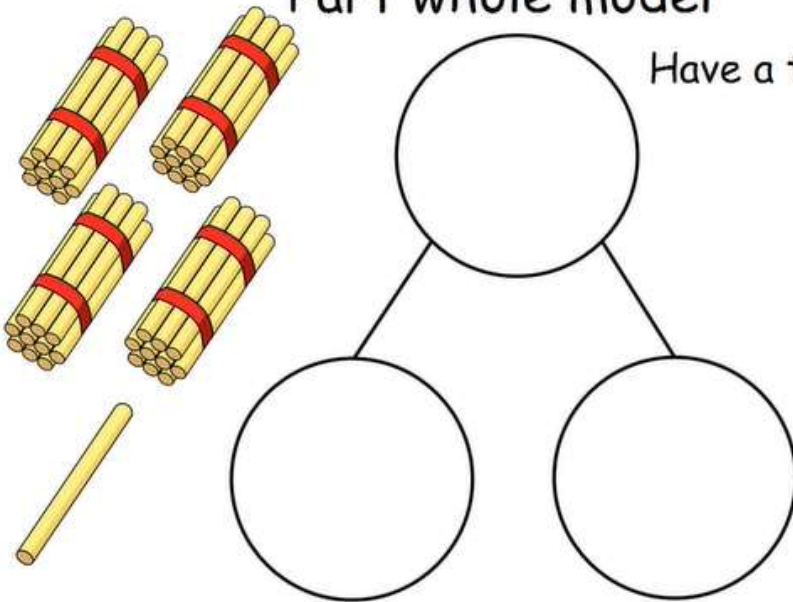
Answer the question when prompted



3 tens and 8 ones =

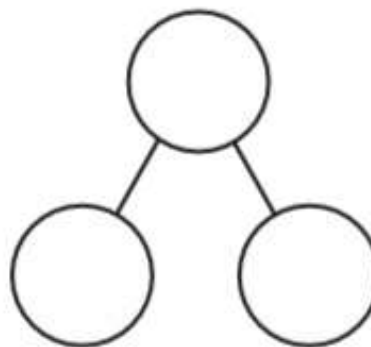

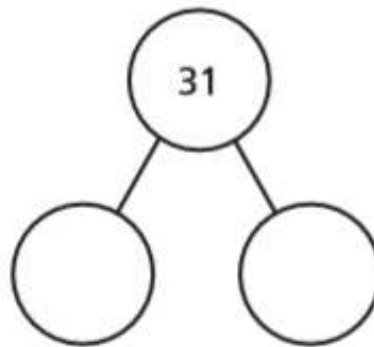
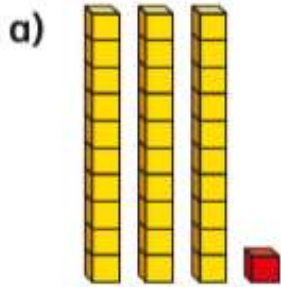
# Part whole model

Have a thi



Have a go at question 1

**1** Complete the part-whole model for each picture.



Complete question 2

**2** Make these numbers with counters or cubes.

a) 16

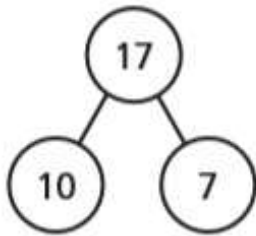
b) twenty-one

c) 43

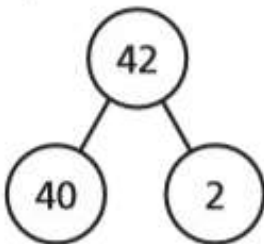
Complete questions 3 and 4

**3** Draw a picture to match each part-whole model.

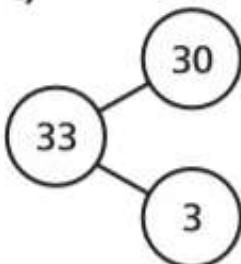
a)



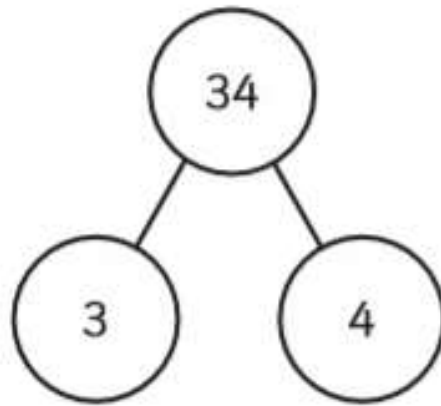
b)



c)



4 Mo has filled in this part-whole model.



What mistake has Mo made?



12 - 1pm - Lunch

1pm

### Chinese New Year

Today you will be doing some activities linked to Chinese New Year.

## How Chinese New Year is Celebrated

Lanterns Are Lit



Dumplings Are Eaten



Fire Crackers



Red Envelopes



Traditional Dancing



Dragon Dances



House Cleaning to Sweep Away Bad Fortune



Lion Dances



Fireworks



Offerings to the Kitchen God



There are a range of activities over the next few pages for you to have a go at. *Get creative and have fun.*

Go on 'Chinese New Year Poster' on Purple Mash and create a poster for Chinese New Year.

Have a go at creating a Chinese Dragon. There is one with a full body and one that is made out of shapes.

Chinese Shape Dragon



Body

twinkl.co.uk

stick to head



A


A



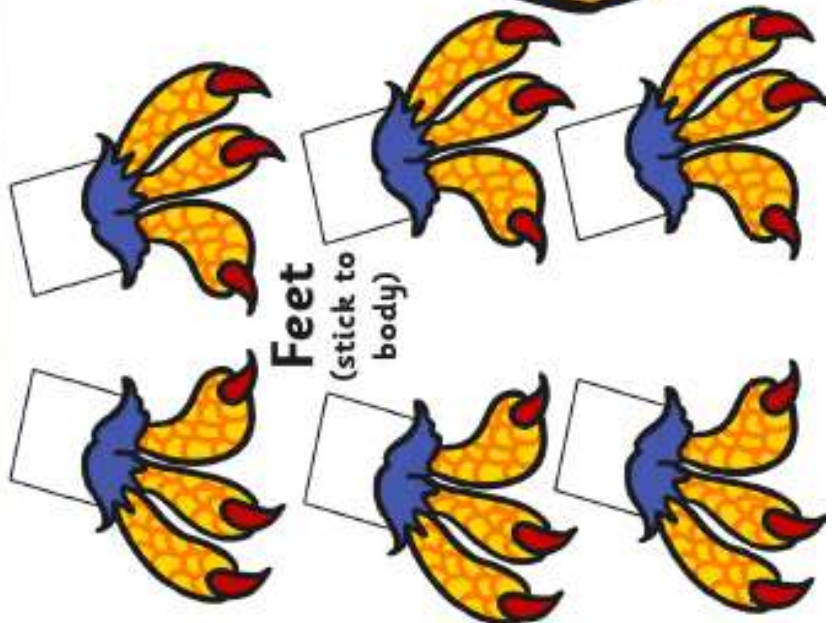
stick to tail



Head



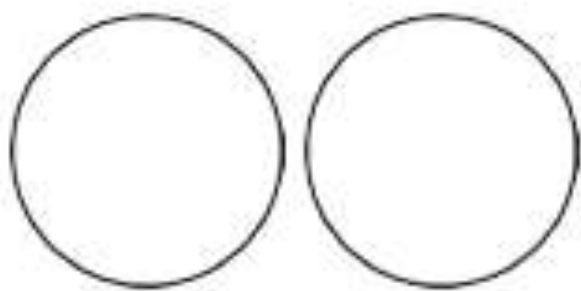
Tail





Feet  
(stick to body)













# Chinese Shape Dragon

Can you use the shapes to make your own Chinese dragon picture?



Finish off your week with some Cosmic Kids Yoga or Zumba.

<https://www.youtube.com/user/CosmicKidsYoga>